

Name: _____ Date: _____

Number Sentences for Addition


Use counters. Write the addition sentence.

There are 11  swimming.


9 more swim along.

How many  are there in all?


$$\underline{\quad\quad} + \underline{\quad\quad} = \underline{\quad\quad}$$

There are 6 .

7 more join them.

How many  are there altogether?

$$\underline{\quad\quad} + \underline{\quad\quad} = \underline{\quad\quad}$$

There are 15 .

2 more join them.

How many  are there in all?

$$\underline{\quad\quad} + \underline{\quad\quad} = \underline{\quad\quad}$$



FOCUS

Children use counters to represent each addition story and record matching number sentences.



HOME CONNECTION

Use a collection of up to 20 objects. Separate the collection into two groups, and ask your child to say the addition sentence, and find how many there are altogether.